

Please write clearly in block capitals.

Centre number

--	--	--	--	--

Candidate number

--	--	--	--

Surname

Forename(s)

Candidate signature

GCSE MATHEMATICS

F

Foundation Tier Unit 2 Number and Algebra

Friday 6 November 2015

Morning

Time allowed: 1 hour 15 minutes

Materials

For this paper you must have:

- mathematical instruments.

You must **not** use a calculator.



Instructions

- Use black ink or black ball-point pen. Draw diagrams in pencil.
- Answer **all** questions.
- You must answer the questions in the spaces provided. Do not write outside the box around each page or on blank pages.
- Do all rough work in this book.

Information

- The marks for questions are shown in brackets.
- The maximum mark for this paper is 66.
- The quality of your written communication is specifically assessed in Questions 7, 10, 16 and 17. These questions are indicated with an asterisk (*).
- You may ask for more answer paper and graph paper. These must be tagged securely to this answer book.

Advice

- In all calculations, show clearly how you work out your answer.



N 0 V 1 5 4 3 6 0 2 F 0 1

Answer **all** questions in the spaces provided.

1 (a) Write down the next odd number after 4529 **[1 mark]**

Answer

1 (b) Write down **all** the factors of 21 **[2 marks]**

.....
.....

Answer

1 (c) Show that 20 is a multiple of 5 **[1 mark]**

.....
.....

2 (a) Write in words the number 2.46 **[1 mark]**

.....

2 (b) Write the number 2046 to the nearest 10 **[1 mark]**

Answer



2 (c) Write down the **value** of the digit 4 in the answer to 246×10 **[1 mark]**

.....
.....

Answer

2 (d) Work out $2 + 4 \times 6$ **[1 mark]**

.....
.....

Answer

2 (e) Use each of the numbers 2, 4 and 6 once only to write a calculation with an answer of 3 **[1 mark]**

..... = 3



3 (a) Circle the decimal that is equivalent to $\frac{3}{4}$ **[1 mark]**

0.34

0.45

0.60

0.75

3 (b) Circle the percentage that is equivalent to 0.3 **[1 mark]**

0.3%

3%

30%

33%

3 (c) Three of these fractions are equivalent to $\frac{3}{4}$
Circle the fraction that is **not** equivalent to $\frac{3}{4}$ **[1 mark]**

 $\frac{6}{8}$ $\frac{9}{12}$ $\frac{12}{15}$ $\frac{15}{20}$ 

4 (a) Here is a linear sequence.

..... 13 21 29 37

The first term is missing.

Work out the first term.

[1 mark]

.....

Answer

4 (b) Here is a different linear sequence.

11 17 23 29

Work out the next **two** terms.

[1 mark]

.....

.....

Answer and

4 (c) Work out an expression for the n th term of the sequence

11 17 23 29

[2 marks]

.....

.....

.....

Answer

7

Turn over ►



5 Here are six numbers.

1 2 4 6 8 12

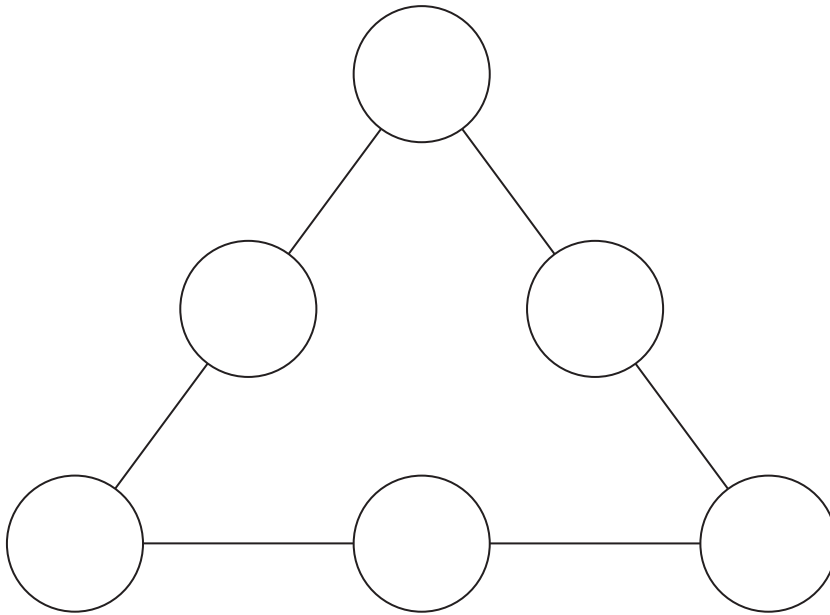
Put the numbers into the circles so that

all of the numbers are used

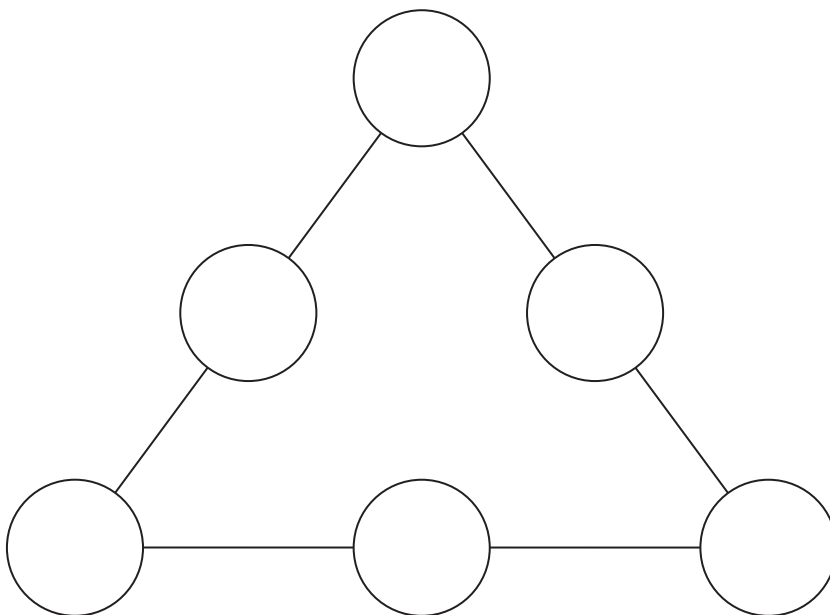
and the product of the three numbers on each side is 48

[3 marks]

You may practise on this diagram.



Put your answer on this diagram.



6 (a) Work out $\frac{3}{5}$ of 45

[2 marks]

.....
.....

Answer

6 (b) Work out $\frac{1}{3} \times \frac{1}{5}$

[1 mark]

.....
.....

Answer

*7 A company has 8 minibuses.
Each minibus can carry 14 passengers.

The company wants to take 98 people on a trip.

Does the company have enough minibuses?
You **must** show your working.

[2 marks]

.....
.....
.....
.....
.....
.....
.....

Answer



8 Pat works 38 hours.

She works
28 hours from Monday to Friday
and 10 hours on Saturday.

Her normal pay is £7 per hour.
On Saturday her pay per hour is 20% more.

Work out her total pay.

[4 marks]

.....

.....

.....

.....

.....

.....

.....

.....

.....

.....

.....

Answer £



9 (a) Write these numbers in order, starting with the smallest.

0.7

0.684

0.81

[1 mark]

Smallest

.....

Largest

9 (b) Work out 0.3×0.2

[1 mark]

.....

.....

Answer

9 (c) Work out $0.6 - 0.37$

[1 mark]

.....

.....

Answer

7

Turn over ►



10 The cost of a taxi ride is given by the formula

$$C = 4.5 + 0.5m$$

C is the cost in pounds.
 m is the number of miles.

***10 (a)** Work out the cost for 18 miles.

[2 marks]

.....
.....
.....
.....

Answer £

10 (b) Sidrah paid £17.50 for her taxi ride.

How many miles did she travel?

[2 marks]

.....
.....

Answer miles



11 Tom took three tests.
Here are his results.

English
13 out of 20

Maths
$\frac{37}{50}$

Science
125 out of 200

Write his results as percentages.

[3 marks]

.....

.....

.....

.....

.....

.....

.....

.....

English %

Maths %

Science %

7

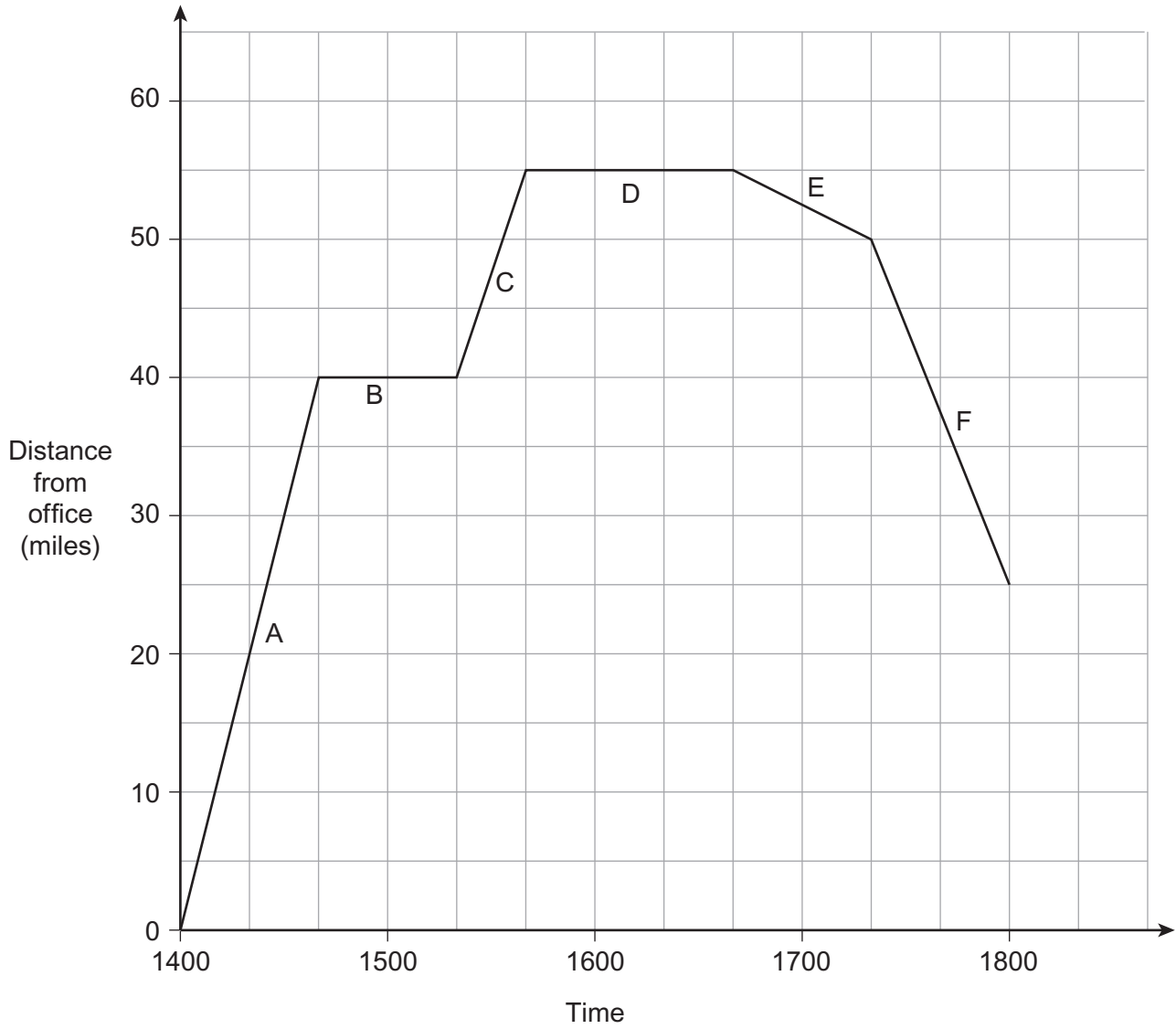
Turn over ►



12

Ruth left her office at 1400
She drove to two meetings and then drove home.

The distance-time graph shows her journeys.



12 (a) How many minutes was she stopped altogether?

[1 mark]

.....
.....

Answer minutes

12 (b) How many miles did she drive altogether?

[1 mark]

.....
.....

Answer miles

12 (c) On which part of the journey was her speed the fastest?
Circle your answer.

[1 mark]

A C E F

Turn over for the next question

3

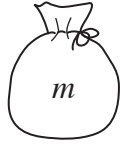
Turn over ►



13 m is the number of marbles in Bag A.

Bag B has six more marbles than Bag A.

Bag C has twice as many marbles as Bag B.



Bag A



Bag B



Bag C

13 (a) Write an expression for the number of marbles in Bag C.

[2 marks]

.....
.....

Answer

13 (b) Altogether there are 66 marbles.

Work out the number of marbles in Bag A.

[3 marks]

.....
.....
.....
.....
.....
.....

Answer



14 Here are five expressions.

A	$2x$
B	$x^2 + 4x$
C	$3x$
D	$2x - x^2$
E	$x^2 + 3x$

When you add two of the expressions the answer is $6x$

Which two expressions?

[1 mark]

..... and

15 $N = 2a + b$

a is a two-digit square number.

b is a two-digit cube number.

What is the **smallest** possible value of N ?

[3 marks]

.....

.....

.....

.....

.....

.....

Answer

9

Turn over ►



***16** Here are two offers for batteries.

OFFER A
Pack of 4
£2.52
$\frac{1}{3}$ off

OFFER B
Pack of 5
£2.75
Pay for 3 packs get 1 free

Zak wants to buy 40 batteries.

Which is the cheaper offer?
You **must** show your working.

[5 marks]

.....

.....

.....

.....

.....

.....

.....

.....

.....

.....

.....

.....

.....

.....

.....

.....

.....

.....

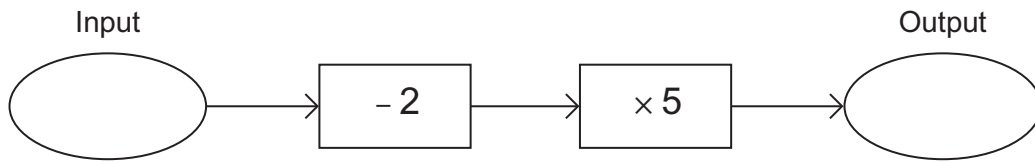
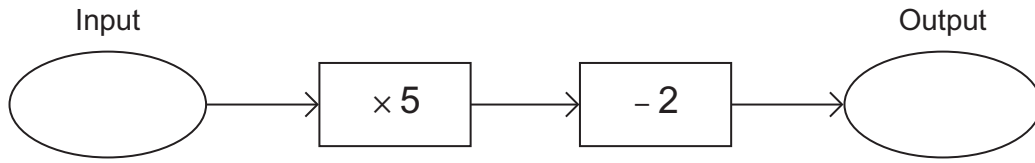
.....

.....

Answer



*17 Here are two number machines.



When the inputs are equal,
show that the **difference** between the outputs is always 8

[3 marks]

.....

.....

.....

.....

.....

.....

.....

.....

8

Turn over ►



18 (a) Write 132 as a product of prime factors.

[2 marks]

Answer

18 (b) Work out the Highest Common Factor (HCF) of 110 and 132

[2 marks]

Answer



19 Use approximations to estimate the value of $\frac{3.92^2}{0.48}$ **[2 marks]**

.....
.....
.....
.....

Answer

20 Divide £5600 in the ratio 5 : 3 **[2 marks]**

.....
.....
.....
.....

Answer £ : £

END OF QUESTIONS



There are no questions printed on this page

**DO NOT WRITE ON THIS PAGE
ANSWER IN THE SPACES PROVIDED**

Copyright information

For confidentiality purposes, from the November 2015 examination series, acknowledgements of third party copyright material will be published in a separate booklet rather than including them on the examination paper or support materials. This booklet is published after each examination series and is available for free download from www.aqa.org.uk after the live examination series.

Permission to reproduce all copyright material has been applied for. In some cases, efforts to contact copyright-holders may have been unsuccessful and AQA will be happy to rectify any omissions of acknowledgements. If you have any queries please contact the Copyright Team, AQA, Stag Hill House, Guildford, GU2 7XJ.

Copyright © 2015 AQA and its licensors. All rights reserved.

